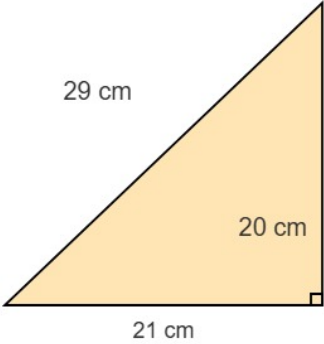
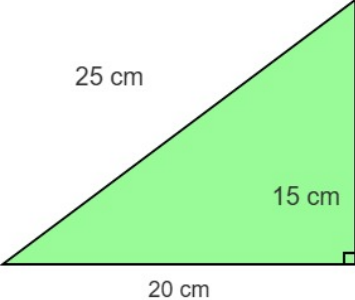
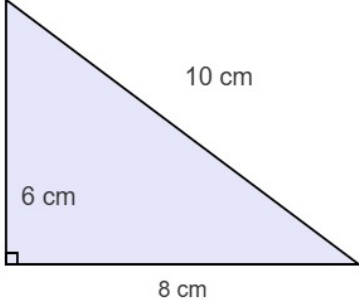
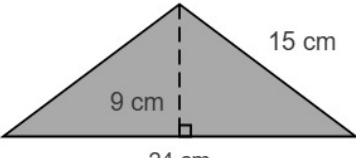
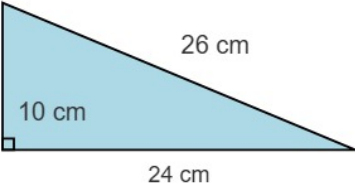
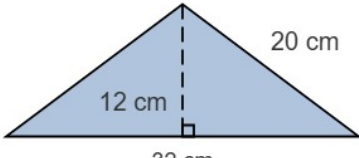
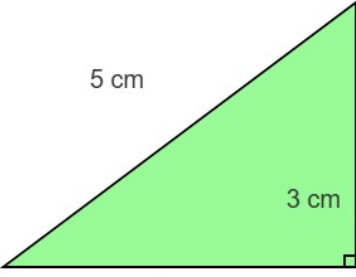
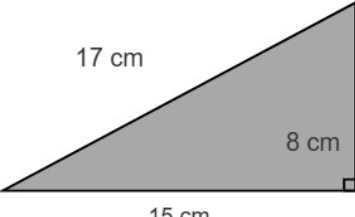
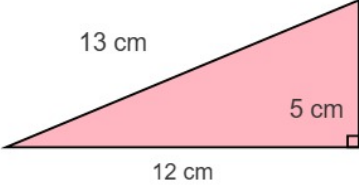


LUAS DAN KELILING SEGITIGA

Temukan luas dan keliling segitiga berikut.

<p>1. Keliling = cm Luas = cm²</p> 	<p>2. Keliling = cm Luas = cm²</p> 	<p>3. Keliling = cm Luas = cm²</p> 
<p>4. Keliling = cm Luas = cm²</p> 	<p>5. Keliling = cm Luas = cm²</p> 	<p>6. Keliling = cm Luas = cm²</p> 
<p>7. Keliling = cm Luas = cm²</p> 	<p>8. Keliling = cm Luas = cm²</p> 	<p>9. Keliling = cm Luas = cm²</p> 

Nama :

Kelas :

Nilai



Kunci Jawaban:

1. Keliling: 70 cm, Luas: 210 cm²
2. Keliling: 60 cm, Luas: 150 cm²
3. Keliling: 24 cm, Luas: 24 cm²
4. Keliling: 54 cm, Luas: 108 cm²
5. Keliling: 60 cm, Luas: 120 cm²
6. Keliling: 72 cm, Luas: 192 cm²
7. Keliling: 12 cm, Luas: 6 cm²
8. Keliling: 40 cm, Luas: 60 cm²
9. Keliling: 30 cm, Luas: 30 cm²