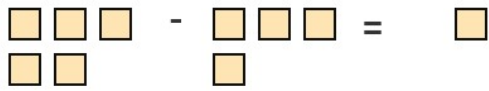
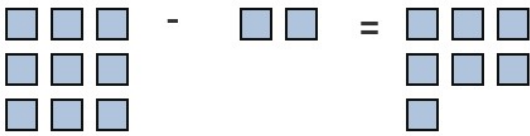
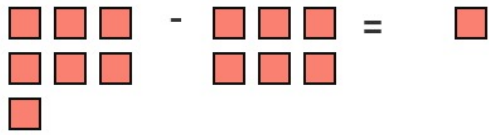
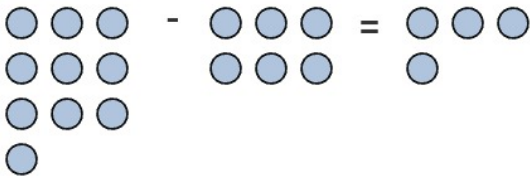
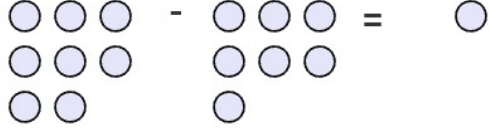

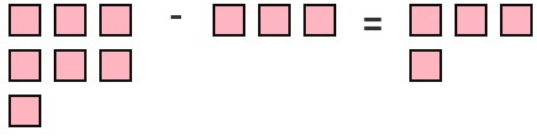
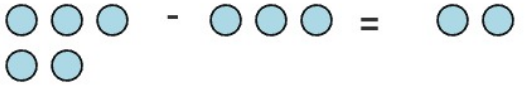


PENGURANGAN 1-10 DILENGKAPI DENGAN GAMBAR

Hitung, Kurangkan dan Tulis Jawabannya

<p>1.</p>  $\square - \square = \square$	<p>2.</p>  $\square - \square = \square$
<p>3.</p>  $\square - \square = \square$	<p>4.</p>  $\square - \square = \square$
<p>5.</p>  $\square - \square = \square$	<p>6.</p>  $\square - \square = \square$
<p>7.</p>  $\square - \square = \square$	<p>8.</p>  $\square - \square = \square$

Kunci Jawaban:

1. $5 - 4 = 1$

2. $9 - 2 = 7$

3. $7 - 6 = 1$

4. $10 - 6 = 4$

5. $8 - 7 = 1$

6. $6 - 2 = 4$

7. $7 - 3 = 4$

8. $5 - 3 = 2$