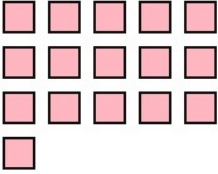
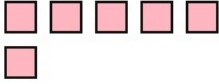
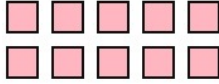



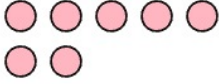
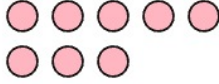
PENGURANGAN 10-20 DILENGKAPI DENGAN GAMBAR

Hitung, Kurangkan dan Tulis Jawabannya


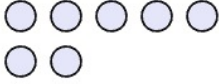
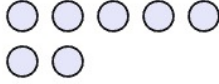
1.

	-		=	
<input type="text"/>	-	<input type="text"/>	=	<input type="text"/>



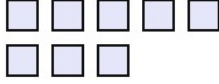
2.

	-		=	
<input type="text"/>	-	<input type="text"/>	=	<input type="text"/>

3.

	-		=	
<input type="text"/>	-	<input type="text"/>	=	<input type="text"/>

4.

	-		=	
<input type="text"/>	-	<input type="text"/>	=	<input type="text"/>

Answer:

1. $16 - 6 = 10$

2. $15 - 7 = 8$

3. $14 - 7 = 7$

4. $10 - 2 = 8$