


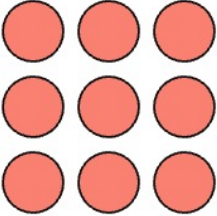
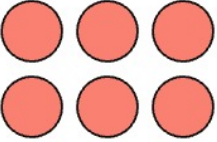

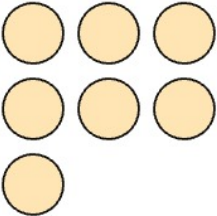
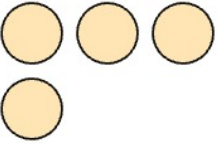

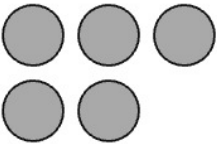

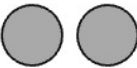


# PENGURANGAN MUDAH DENGAN GAMBAR

Hitung, Kurangkan dan Tulis Jawabannya

1.		-		=	
	<input type="text"/>	-	<input type="text"/>	=	<input type="text"/>
2.		-		=	
	<input type="text"/>	-	<input type="text"/>	=	<input type="text"/>
3.		-		=	
	<input type="text"/>	-	<input type="text"/>	=	<input type="text"/>
4.		-		=	
	<input type="text"/>	-	<input type="text"/>	=	<input type="text"/>

Kunci Jawaban:

1.  $6 - 3 = 3$

2.  $9 - 6 = 3$

3.  $7 - 4 = 3$

4.  $5 - 3 = 2$