

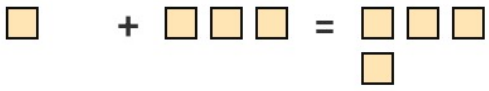
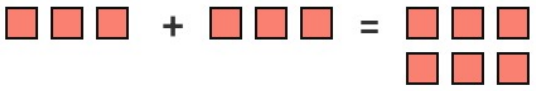

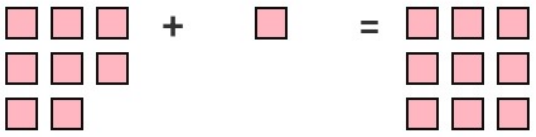
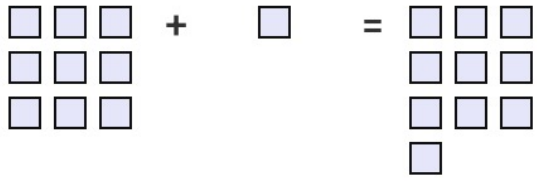
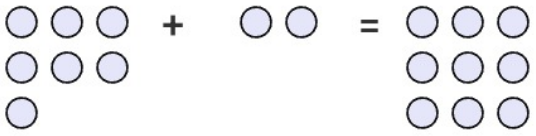


# PENJUMLAHAN 1-10 DILENGKAPI DENGAN GAMBAR

Hitung, Tambahkan lalu Tulis Jawabannya

<p>1.</p>  <input type="text"/> + <input type="text"/> = <input type="text"/>	<p>2.</p>  <input type="text"/> + <input type="text"/> = <input type="text"/>
<p>3.</p>  <input type="text"/> + <input type="text"/> = <input type="text"/>	<p>4.</p>  <input type="text"/> + <input type="text"/> = <input type="text"/>
<p>5.</p>  <input type="text"/> + <input type="text"/> = <input type="text"/>	<p>6.</p>  <input type="text"/> + <input type="text"/> = <input type="text"/>
<p>7.</p>  <input type="text"/> + <input type="text"/> = <input type="text"/>	<p>8.</p>  <input type="text"/> + <input type="text"/> = <input type="text"/>

Nama : .....

Kelas : .....

<input type="text"/> Nilai
-------------------------------



Kunci Jawaban:

1.  $5 + 1 = 6$

2.  $3 + 3 = 6$

3.  $1 + 3 = 4$

4.  $3 + 3 = 6$

5.  $6 + 3 = 9$

6.  $8 + 1 = 9$

7.  $9 + 1 = 10$

8.  $7 + 2 = 9$