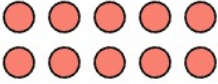
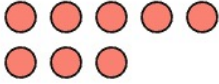
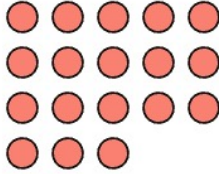




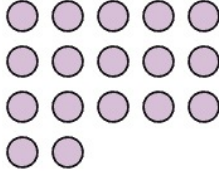
PENJUMLAHAN 10-20 DILENGKAPI DENGAN GAMBAR

Hitung, Tambahkan lalu Tulis Jawabannya


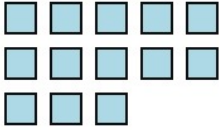

1.

	+		=	
<input type="text"/>	+	<input type="text"/>	=	<input type="text"/>

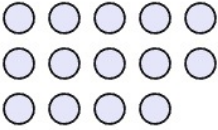

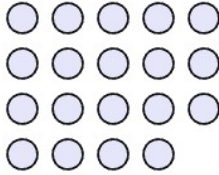
2.

	+		=	
<input type="text"/>	+	<input type="text"/>	=	<input type="text"/>

3.

	+		=	
<input type="text"/>	+	<input type="text"/>	=	<input type="text"/>

4.

	+		=	
<input type="text"/>	+	<input type="text"/>	=	<input type="text"/>

Kunci Jawaban:

1. $10 + 8 = 18$

2. $5 + 12 = 17$

3. $6 + 13 = 19$

4. $14 + 5 = 19$