

Nama :

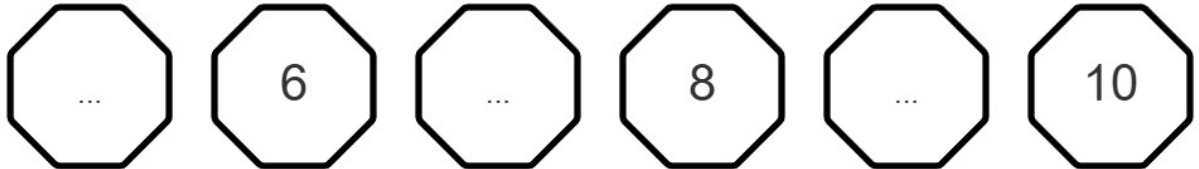
Kelas :

Nilai

MENGHITUNG MAJU 1 SAMPAI 10

Lengkapi kotak dengan angka yang sesuai

1.



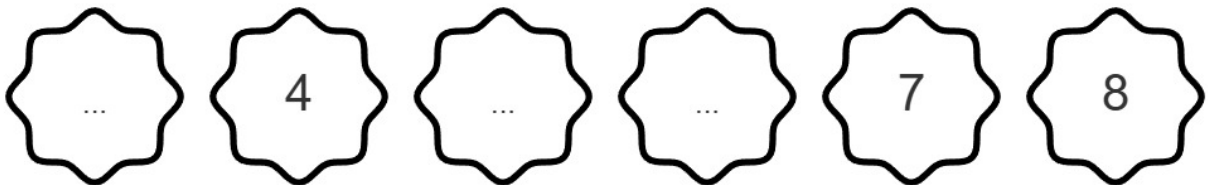
2.




3.



4.



5.



6.



Answer:

1. 5, 6, 7, 8, 9, 10

2. 4, 5, 6, 7, 8, 9

3. 1, 2, 3, 4, 5, 6

4. 3, 4, 5, 6, 7, 8

5. 5, 6, 7, 8, 9, 10

6. 3, 4, 5, 6, 7, 8